

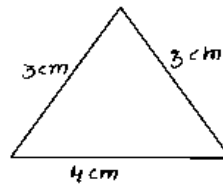
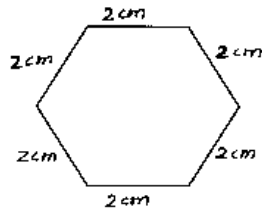
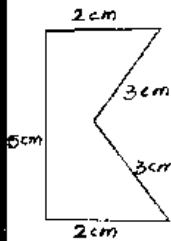
## CHAPTER : 9 AREA AND PERIMETER

### Fill in the blanks

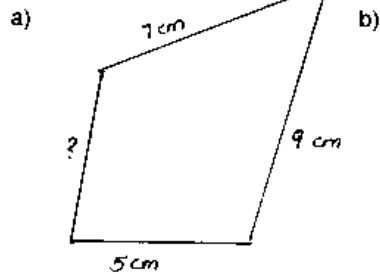
1. The distance around the edge of a figure is called its \_\_\_\_\_.
2. \_\_\_\_\_ is the amount of surface a figure covers .
3. The unit of area is \_\_\_\_\_.

### Do the following

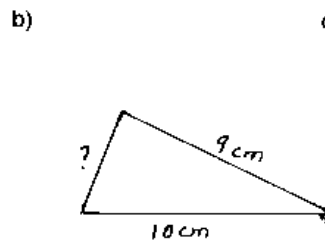
1. Find the perimeter of the following



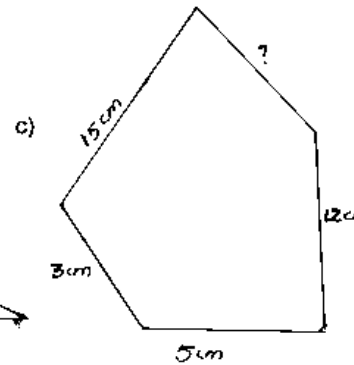
2. Find the missing length.



Perimeter = 27



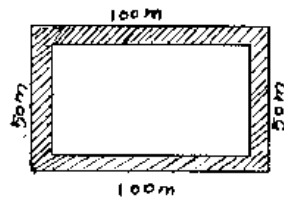
Perimeter = 22 cm



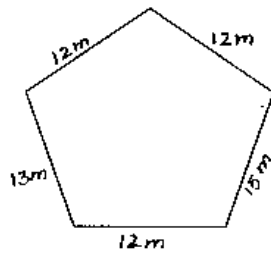
Perimeter = 41 cm

3. Look at the pictures to answer the questions.

a) How far would you go if you jog around the school once? Twice?



b) How much fencing will be needed for this garden?



4. What area does each design cover?

*Refer text book exercises - Page 169 to 171*