

MATHS COMPREHENSIVE ASSESMENT TEST WORKSHEET NO-18
Class III
Session 2013-14

(1) Read the following pictogram and answer the questions:

Maths	
English	
Hindi	
Science	
Drawing	

Here 1 book represents 10 books.

- (a) Which subject has maximum number of books?
- (b) How many science books are there?
- (c) Which subject has minimum number of books?
- (d) What is the total number of books?
- (e) What is the maximum number of books in the pictogram?

(2) Draw the other halves to make them symmetrical shapes.



(3) Look at these pictures. Tick (✓) the ones which can be divided into exact halves.


a.



b.



c.



d.




f.



e.




g.




h.




i.



j.

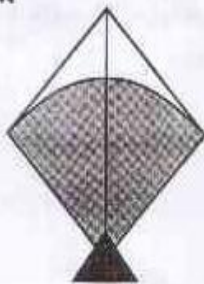


k.




(4) Use a dotted line to divide the shapes into two halves.


a.



b.



c.



d.

