

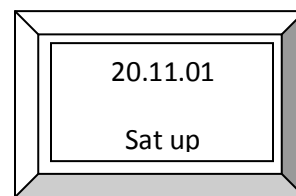
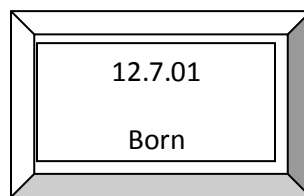
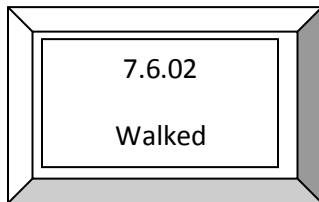
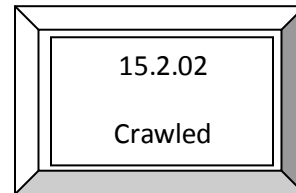
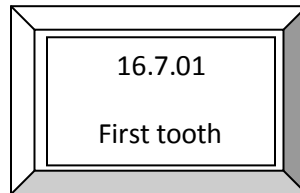
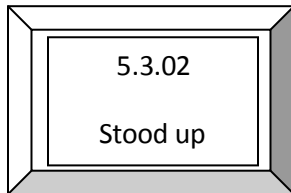
WORK SHEET NO. 4

Date _____

Month _____

Competency : Problem Solving Ability

A. Rearrange these events in order and draw the time line and answer below



How old was Seema?

- When she walked? _____
- When she sat up? _____
- When she crawled? _____

Teacher's Signature

Parent's Signature