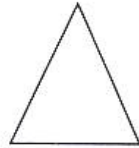


**Match the following shapes :-**

1.



**Cone**

2.



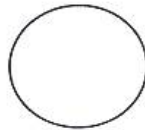
**Triangle**

3.



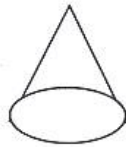
**Square**

4.



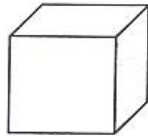
**Rectangle**

5.



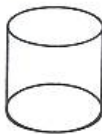
**Cube**

6.




**Cylinder**

7.



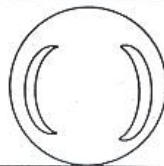
**Cuboid**

8.



**Sphere**

9.



**Circle**


Name the Following Shapes



\_\_\_\_\_



\_\_\_\_\_




\_\_\_\_\_



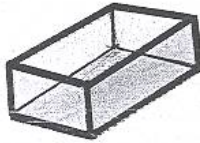
\_\_\_\_\_



\_\_\_\_\_



\_\_\_\_\_



\_\_\_\_\_



\_\_\_\_\_



\_\_\_\_\_



\_\_\_\_\_