


Session 2012-2013

Worksheet No. 8


Subject : Maths

Name Date : Class/sec: III ____


Q1. Draw the hands to show the time .




quarter past 5



quarter to 8

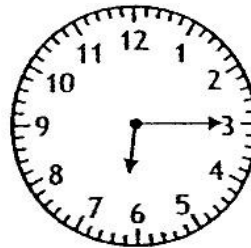




10 : 10



1 : 45

Q2 . Write the time under the clocks in words and in figures .



Q3. Fill in the blanks so that both sides become equal .

a) 2 l = _____ ml + _____ ml

b) 1Kg = _____ g + _____ g

c) 200 ml + 800 ml = _____ ml

d) 100 ml + _____ ml = 1000 ml

e) 4kg 700 g = _____ g

Q3 Match the time .

- | | |
|----------|------------------|
| a) 3:45 | 20 minutes to 5 |
| b) 10:30 | quarter past 9 |
| c) 4:40 | quarter to eight |
| d) 9:15 | quarter to 4 |
| e) 7:45 | half past ten |

