

MATH

BUDGET PLANNING

ACTIVITY 1

- Make a budget for 3 days.
- Follow the steps given below.
 - I. Day 1- List out the items bought and the money spent on them.
Find the total money spent on that day.
 - II. Follow the same step for the next 2 days.
- Add the total amount spent on day 1, 2 and 3.
- From the list prepared, find out the amount spent unnecessarily.(which could have been avoided and saved.)
- Now subtract the amount spent unnecessarily from the total amount.
- **The amount saved is** ₹ _____.

ACTIVITY 2

- Plan a budget for your birthday party from the amount left in the activity 1.
- Do both the activities on an A4 size sheets.
- Hints are given below.



DAY - 1

List Of Items	Money Spent
Vegetables	
Fruits	₹ 250
Milk	₹60
Groceries	
Restaurant	
Petrol	
Games C.D.	
Chips	
Total	

MY BIRTHDAY PARTY EXPENSES

List Of items	Money spent
Cake	
Decoration	
Eatables	₹600
Return gifts	
Prizes	
Cool drinks	
Total spent	



© Alex Bannykh * www.ClipartOf.com/32987

NUMERATION

Q1. Reena has 5 bricks with digits written on them:



In which way should she arrange the bricks in order to obtain the largest and the smallest numbers using each brick only once?

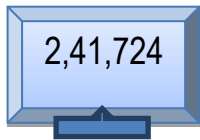
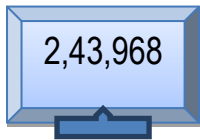
Largest number



Smallest number



Q2. Rohit has 4 televisions with the following numbers written on them.

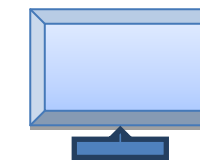
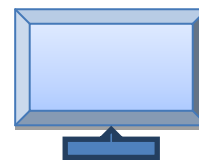
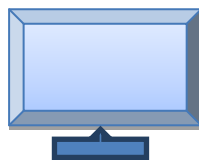


In which way should he arrange the televisions in order to obtain the ascending and descending order?

Ascending order



Descending order



Q3. Write the following numbers in expanded form.

i) 2,34,698 _____

ii) 7,12,034 _____

Q4. Write the place value of the given digits.

i) 2 in 4,56,102 _____

ii) 5 in 7,86,506 _____

Q5. Solve the following and write the answers in Roman numerals.

a) XX - VII =

b) XLVIII - XLIII =

c) XVIII - IV =

d) XXXI + XXVII =

e) VIII + XXVI =

f) XXII + XII + VII =

Q6. Fill in the blanks:

i) _____ + 800000 + 800 + 3000 + 3 + 40 = 833843

ii) 5 + _____ + 400 + 3000 + 10000 + 800000 = 813475

iii) 60 + 20000 + 700 + _____ + 5 + 900000 = 928765

iv) 30000 + 100000 + 300 + 8000 + 0 + _____ = 138380

v) 7000 + 800 + 60 + _____ + 80000 = 87864

Q7. Compare using <, >, or =:

864447	<input type="text"/>	864031	689254	<input type="text"/>	688999
23192	<input type="text"/>	232782	814421	<input type="text"/>	814914

Q8. Write the range of numbers which can be rounded off to the nearest 1,000.

- i) 2,469 is between 2,000 and 3,000 and is rounded to 2,000.
- ii) 4,760 is between _____ and _____ and is rounded to _____.
- iii) 6,099 is between _____ and _____ and is rounded to _____.
- iv) 2,967 is between _____ and _____ and is rounded to _____.

i) $35678 + 0 = \underline{\hspace{2cm}}$

ii) $\underline{\hspace{2cm}} + 987607 = 987607$

i) $23761 + 47604 = 47604 + \underline{\hspace{2cm}} = \underline{\hspace{2cm}}$

ii) $67531 + \underline{\hspace{2cm}} + 97522 = 97522 + \underline{\hspace{2cm}} + 4768$



i) $56748 + 1 = \underline{\hspace{2cm}}$

ii) $1 + \underline{\hspace{2cm}} = 12984$

i) $13498 + (67854 + 4789) = 67854 + (\underline{\hspace{2cm}} + 4789)$

ii) $(45098 + \underline{\hspace{2cm}}) + 38790 = 45098 + (\underline{\hspace{2cm}} + 6573)$