

# Topic: Fields and Fences


Date \_\_\_\_\_

## WORK SHEET No. 1

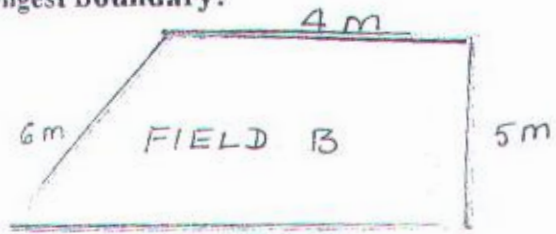
Month \_\_\_\_\_

### Competency :-Ability to Compute

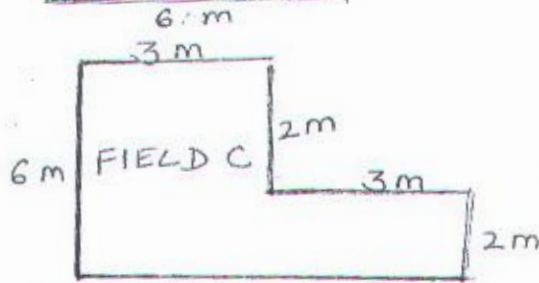
I. Which of the following fields has the longest boundary?




Perimeter of field A: 5m



Perimeter of field B:



Perimeter of field C:



Perimeter of field D:

If the cost of fencing is Rs 25 per meter. How much does it cost to fence the fields?

Cost of fencing field A :

Cost of fencing field B :

Cost of fencing field C :

Cost of fencing field D :

Teacher's sign.

Parents' sign