


# WORK SHEET NO. 2


Date \_\_\_\_\_

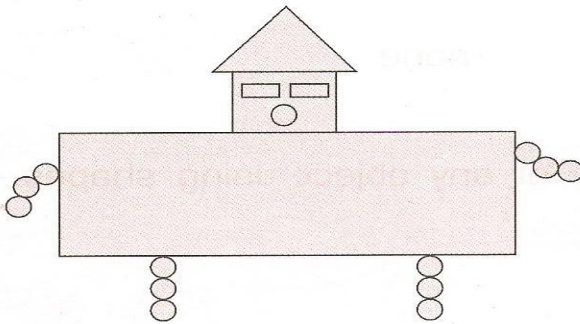
Month \_\_\_\_\_

## Competency: Understanding Basic Concepts


### 1. Count these shapes:





 \_\_\_\_\_




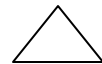
 \_\_\_\_\_


 \_\_\_\_\_


 \_\_\_\_\_

 \_\_\_\_\_

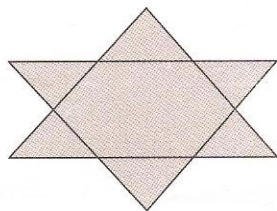


 \_\_\_\_\_

 \_\_\_\_\_

 \_\_\_\_\_

 \_\_\_\_\_



 \_\_\_\_\_

Teacher's signature

Parent's signature