

Weekend Worksheet 2014-15

MATHS

Class ▶ III Section ▶

Date ▶

Name ▶


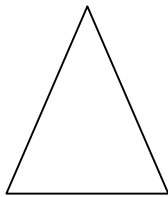
Roll No. ▶

1. Identify the next three patterns.






b. 100 90 80 70 ____ .

2. Identify the number of sides in the following figures:




3. Write 'S' if the image is symmetrical and NS if the image is not symmetrical.



4. Tick the correct answer:

i.



Edges: _____?

- a. 0 b. 2 c. 1 d. 3

ii. 1 3 6 10 15 _____?

- a. 21 b. 19 c. 11 d. 25