

Weekend Worksheet - 2014-15

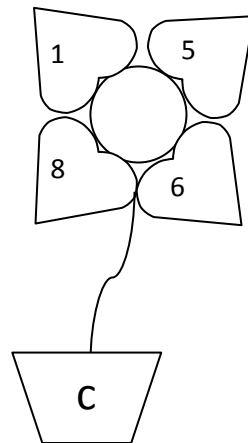
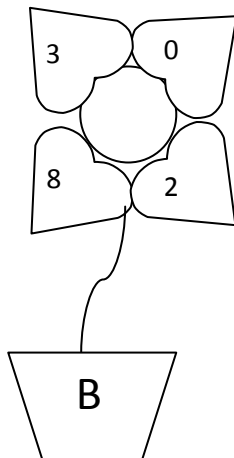
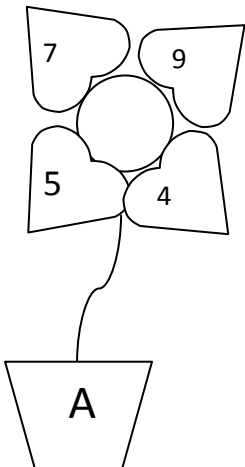
MATHS

Class ▶ III Section ▶

Date ▶

Name ▶

Roll No. ▶



I. Using the digits given in the petals of each flower, write the smallest and the greatest number and circle the even number.

Smallest number: A _____ B _____ C _____

Greatest number : A _____ B _____ C _____

II. Multiply

a. 218×12

b. 368×7

