


HOLIDAY HOMEWORK

Class V

SUMMER HOLIDAYS



The greatest time of the year
Summer holidays
Much freedom and lots of cheer
Summer holidays
Just do what you want to do
And have lots of fun too!

Just have a great time with your friends
Summer holidays
You got even time to watch the ants
Summer holidays
Do think of all things that are cool
As summer holidays have no rules!

Meet friends, have fun or just chill out
Buy milkshake, go swim or eat an ice upon a roundabout
You understand what they are like?
Summer holidays are the time of your life!



ENGLISH

FUN WITH NOTICE WRITING

- Making a notice can be great fun. Create your own notices in the space provided relating to the given situations. One is done for you.

1. Write a notice which is generally seen in a zoo.

DO NOT TEASE OR FEED THE ANIMALS

2. Write a notice to be put in front of your classroom.

3. Write a notice that you can put up on the door of your room.

4. Write a notice for your brother who spoils your books and throws your toys around.

- On an A4 size sheet, make a notice that you can put up in the corridors of your school for your friends and yourself to keep your school clean. You can also use illustrations.

SYNONYMS

A synonym is a word that has the same or nearly the same meaning as another word. *Huge* is a synonym for large.

1. Find synonyms in the grid

X f a l l d
T a l k f a
J u m p l m
S t o p x p

- a chat _____
- b mend _____
- c leap _____
- d drop _____
- e halt _____
- f wet _____

2. Unjumble the letters to make a synonym for each word.

- a. simple y s e a _____
- b. cry e w e p _____
- c. fast k c i q u _____
- d. tidy t a n e _____
- e begin t r s t a _____
- f mix r i s t _____

3. These words are synonyms. True or false?

- a. bashful; shy _____
- b. boast; brag _____
- c. conceal; hide _____
- d. true; false _____
- e. odd; queer _____

4. Replace the bold word with its Synonym.

 piece
 broad middle

- a. The girl stood in the **centre** of the circle

- b. A **scrap** of meat was on the plate.

- c. The part of the river is quite **wide**.

5. Match each word to its synonym.

old rot big
angry cold late

- a. enormous _____
- b. ancient _____
- c. frigid _____
- d. tardy _____
- e. irate _____
- f. decay _____

6. For each word write a synonym that begins with the letter s.


- a. tiny _____
- b. grin _____
- c. certain _____
- d. frighten _____
- e. ocean _____

Speech bubbles.

Speech marks are not used:

- in cartoons where speech bubbles are used; or
- in a playscript.

Make up a conversation to complete this strip cartoon.





Dictionary Activity

1. Write a word that means the same

- (a) grin _____ (d) swift _____
 (b) wealthy _____ (e) centre _____
 (c) scream _____ (f) moist _____



2. Look up the words in bold print in a dictionary to help you find the missing words

- (a) A **dam** holds lots of w _____
 (b) **Crimson** is a _____ d colour
 (c) A **caterpillar** is a young _____ t _____ y
 (d) A **daisy** is a _____ w _____
 (e) A **ewe** is a female s _____



3. The word **bark** has more than one meaning. Write two of these below. Draw or paste in a picture for each.

(a) bark



(b) bark

4. Circle the correct answer. Where would you find ...

- (a) a **salmon**? ocean land underground
 (b) a **mole**? ocean land underground
 (c) an **ox**? ocean land underground



HINDI

→ माँ ने की हड़ताल

माँ ने की हड़ताल


घर में आया, एक भूचाल।

न ढंग का नहाना - धोना,

न ढंग का खाना पीना।

गैस जली नहीं, दाल गली नहीं।

आटा गुँथा नहीं, रोटी पकी नहीं।



पापा करते बड़बड़, मुन्ने ने की गड़बड़।

स्कूल, दफ्तर को हुई देरी,

हर कोई कहे 'आई आफ्रत मेरी'!

आकर माँ को खूब मनाया,

तब कहीं जाकर चैन आया।

कविता को ध्यान से पढ़िए व प्रश्नों के उत्तर लिखिए :

1. 'माँ ने की हड़ताल' से यहाँ क्या मतलब है ?

.....

.....

2. तुम्हें क्या लगता है, माँ ने हड़ताल क्यों की होगी ?

.....

.....

3. अपने घर में आप क्या - क्या काम करते हो ?

4. 'माँ को कैसे मनाया जाए' इस विषय पर 80 शब्दों का एक अनुच्छेद लिखिए ।

➔ अपने ग्राहकों को बुलाने के लिए एक चने बेचने वाला ये आवाज लगाता है --



ताजे करार चने,
चटपटे मसालेदार,
गरम मजेदार चने,
ऐसे चने यहीं मिलेंगे ।

3. अपने घर में आप क्या - क्या काम करते हो ?

4. 'माँ को कैसे मनाया जाए' इस विषय पर 80 शब्दों का एक अनुच्छेद लिखिए ।

→ अपने ग्राहकों को बुलाने के लिए एक चने बेचने वाला ये आवाज लगाता है --



ताजे करारे चने,
चटपटे मसालेदार,
गरम मजेदार चने,
ऐसे चने यहीं मिलेंगे ।

'संतरे बेचने वाला' यह आवाज लगाता है ----

ताजे ताजे संतरे, बड़े - बड़े संतरे,

नागपुर के संतरे,

दस रुपए के छह हो गए,

इससे सस्ते अब नहीं होंगे ।



इसी तरह बताओ कि :

टी.वी. पर दिखाए जाने वाले विज्ञापनों में से आपका प्रिय विज्ञापन कौन सा है ? लिखिए ।

.....

.....

.....

.....

आपके प्रिय कपड़े या खिलौने के ऊपर एक मजेदार विज्ञापन बनाइए ।

.....

.....

.....

.....

.....

.....

.....

.....

→ अपनी बुद्धि आजमाइए :

दीवाली आते ही अपना भाग्य आजमाने वालों की भीड़ राज के घर में जमा होती थी। उस दिन भी यही हो रहा था। सभी ताश के पत्ते खेलने में व्यस्त थे।

तभी शोर मच गया। घर की बिजली चली गई। घर में अँधेरा छा गया। पंखे बंद हो गए। एक नौकर ने तत्काल पंखों के बटन बंद कर दिए जिससे बिजली आने पर लोड बढ़ जाने से पंखों की मोटरें न जल जाएँ। राज ने सैकड़ों मोमबत्तियाँ जलवा दीं। फिर भी बिजली वाली बात नहीं थी। पंखे न चलने और मोमबत्तियों के जलने से काफ़ी गर्मी हो गई थी। चैन न मिलने पर राज ने राहुल से पंखा चलाने के लिए कहा।

तभी सोहन ने कहा, 'खबरदार राहुल! पंखों का स्विच ऑन न करना, मोमबत्तियाँ बुझ जाएँगी।' 'अरे चलाओ पंखे, देखते नहीं, कितनी गर्मी है, - राज ने कहा। तभी राहुल ने सभी पंखों के स्विच ऑन कर दिए। लेकिन आश्चर्य! कोई मोमबत्ती नहीं बुझी।

क्या आप बता सकते हैं क्यों ?



➡ एक दिन सुबह उठकर आपने देखा कि आप चींटी के समान छोटे से हो गए हैं। इस दिन को एक कहानी के रूप में लिखिए। नीचे लिखे प्रश्न कहानी बनाने में आपकी मदद करेंगे।

प्र.1 चींटी की तरह बनकर आपको चीजें कैसी दिखीं ?

.....
.....

प्र.2 आप कहाँ - कहाँ गए ?

.....
.....

प्र.3 आपके साथ क्या - क्या हुआ ?

.....
.....

प्र.4 तब आपने क्या किया ?

.....
.....

प्र.5 अंत में क्या हुआ ?

.....
.....

प्र.6 जब आप चींटी के समान छोटे से थे तब आपने कैसा महसूस किया ?

.....
.....


EVS

- a) Visit Ugrasen Ki Baoli (Hailey Road opposite Barakhamba School New Delhi). Click a photograph of yourself over there and collect information. Paste it in your 'fun-tastic' notebook.
- b) Visit any big water body near your house and collect pictures / photographs on various aquatic plants and animals in it and paste them in your 'fun -tastic' notebook.
- c) Make a laminated poster/collage (A-4 size) on World Environment Day.



MATHEMATICS

STRING ART



Be sure to start with a full spool of thread. This model uses paper fasteners and the rim of a plastic lid to support the thread design, but there are many materials you can use:

pegs:	design backing:
straight pins	plastic lid
push pins	thermocol
tiny nails	softboard

Draw a square with dotted lines with all dots at equal distance from each other (15 x 15cm)

Number the points as shown .

Press map pins, straight pins, or small nails through each of the points.

Tie the thread around the first pin on side AB .


Pull the string and wind it around the pin numbered 1 on side BC.

Pull the string back to number 2 on AB and then to number 2 on BC .

Continue till all numbers are covered on both sides .

Follow the same procedure with sides AD and CD .

You can use a thread of a different colour for these sides .



What fraction of the square are these –



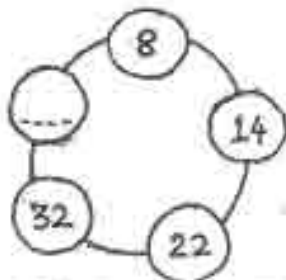
Insert the missing number

a)

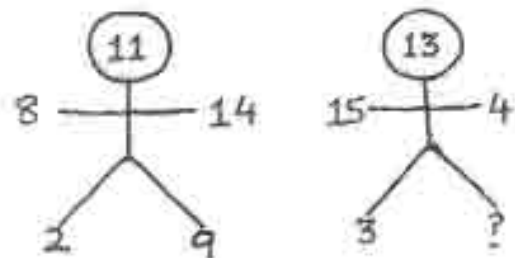
2	5	9	14
26	19	13	8

b) 2, 4, 8, 3, 9, 27, —, —, —

c)



d)



Who am I ?

My ones digit is the smallest even number.

My tens digit is even and you will get it if you add one to the number of days in a week.

My hundreds digit is an even number which you will get if you multiply a number by itself.

If you multiply my thousands digit by itself, you will be get the greatest single digit odd number.

My ten thousands digit is an odd number between three and seven.

My hundred thousands digit is even and you will get it if you subtract one from the number of days in a week.


My millions digit is five times the smallest odd number.

Nancy had seven biscuits. She was a generous person, so she gave half of what she had, plus half of biscuit, to her baby sister. Then she gave half of what was left, plus half a biscuit, to her little brother. She kept half of what was left, plus half a biscuit, for herself. How many biscuits did each person get ?

Susan is a third as old as her mother, who is five years younger than Susan's father. Susan's grandmother is twice as old as Susan's father. Susan is ten. How old is her grandmother ?

If Rita can go around the garden 4 times in 20 minutes, how many times can she go around the garden in one and a half hours ?

The distance between two cities is 320 km. Ajay took two breaks of 30 minutes and 20 minutes respectively. His speed of driving is 80 km per hour. How long did Ajay take to cover the distance between the two cities.



What fraction of the square are these -



Insert the missing number

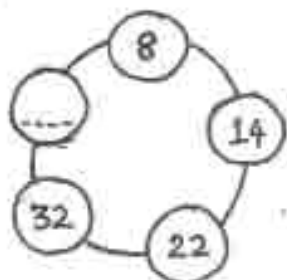
a)

2	5	9	14
26	19	13	8

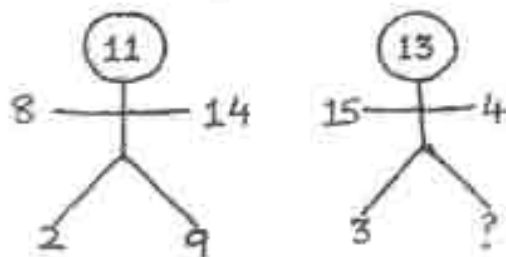
b)

2, 4, 8, 3, 9, 27, _____, _____, _____

c)



d)



LANGUAGES OF INDIA

India has more than 1600 languages. Of these, 18 are officially recognized languages mentioned in our constitution. According to the 1991 census following are the scheduled languages and the number of people speaking each –

LANGUAGE	NUMBER OF PEOPLE	LANGUAGE	NUMBER OF PEOPLE
Assamese	1,30,79,696	Marathi	6,24,81,681
Bengali	6,95,95,738	Nepali	20,76,645
Gujarati	4,06,73,814	Oriya	2,80,61,313
Hindi	33,72,72,114	Punjabi	2,33,78,744
Kannada	3,27,53,676	Sanskrit	49,736
Kashmiri	31,76,975	Sindhi	21,22,848
Konkani	17,60,607	Tamil	5,30,06,368
Malayalam	3,03,77,176	Telegu	6,60,17,615
Manipuri	12,70,216	Urdu	4,34,06,932

Which language is spoken by the largest number of people in the country?

Which language is spoken by the least number of people?

Which language has 9 in the ten lakh place?

What is the place value of 5 in the number of people who speak Tamil?

Give the place value of 5 in the number of people who speak Kannada?

Which two languages have repetitive digits in the lakhs and thousands periods?

Which language is spoken by a larger number of people – Marathi, Telegu or Bengali?

Write the six most commonly spoken languages in order.

TIME FOR CARTOONS

You have to plan an all-morning cartoon festival. Your goal is to schedule cartoons to be shown, in any order, to fill the time from 9:00 a.m. to noon. The schedule must follow these rules:

- You must show at least 4 cartoons.
- Leave 5-6 minutes between each cartoon.
- The cartoons must begin on times that are multiples of 5 (eg. 10:40, not 10:48).
- The cartoons listed below have been chosen by the screening committee. Use the information given to make your schedule.

CARTOON TITLE	RUNNING TIME
Marvin the Moose, Part 2	28 minutes
Ghoos on the Go, Part 8	30 minutes
Large Invaders From Iceland	20 minutes
Bears on Bikes	15 minutes
Space Station Rodeo	24 minutes
Underwater Rabbit Returns Home	35 minutes
Lost Cities on Jupiter	12 minutes
Jungle Mouse and the Big Cheese	20 minutes

Cartoon	Start Time	End Time

FRENCH

Bonjour chers élèves,

There starts another year of learning French!

Did you know that vocabulary learning can actually be a lot of fun!

Take a look!...and enjoy!

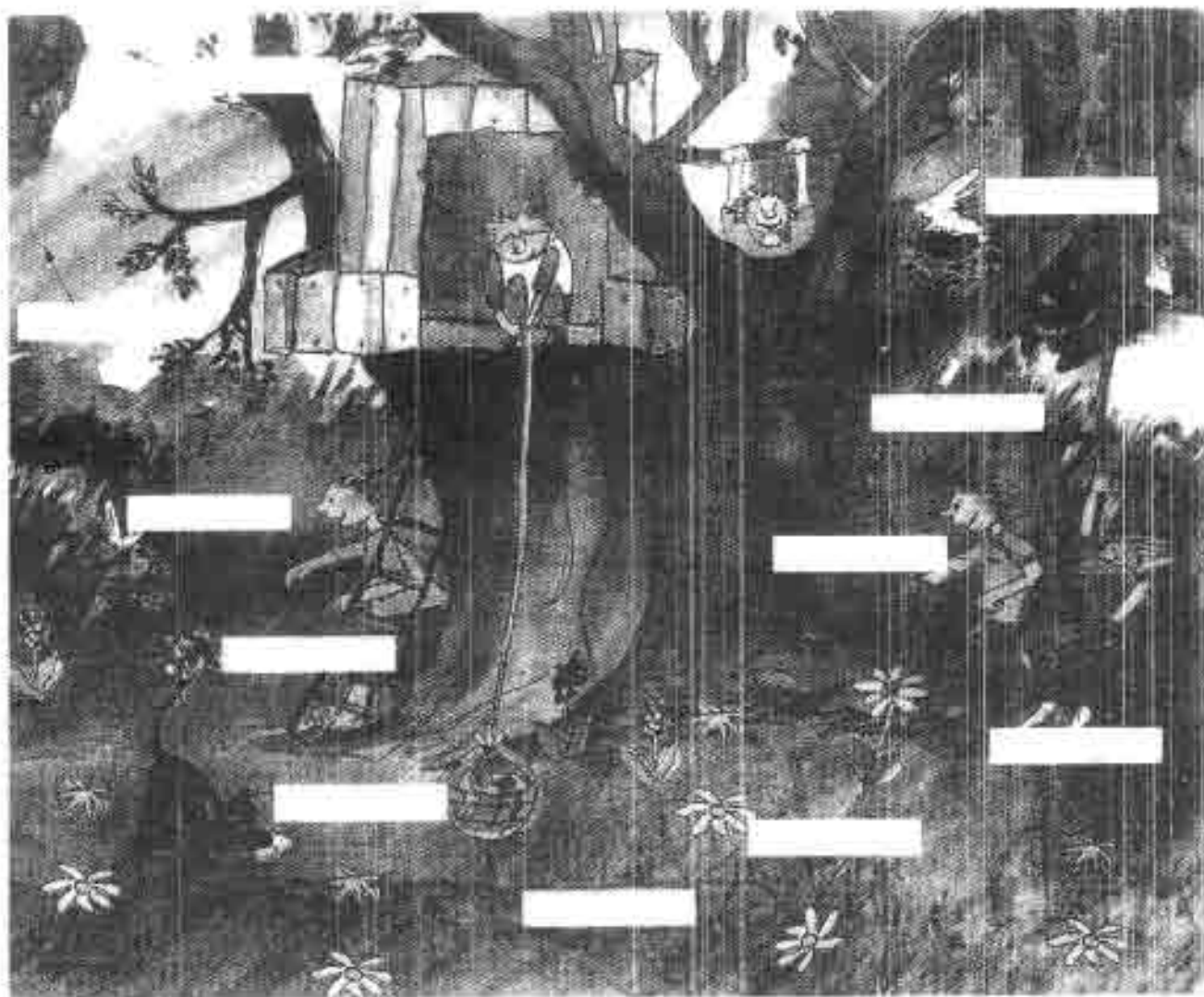
Bons vacances!

Bises

Professeur de français

PRINTEMPS

Ecris les mots qui sont sous le dessin à leur place



arc-en-ciel • ciel • papillon • nid • lapin • chat • garçon •
herbe • fleur • jupe • t-shirt



Révisions

AUTOMNE

Ecris les mots qui sont sous le dessin à leur place.



cerf-volant • parapluie • pantalon • bottes • singe •
pomme • feuilles • maison

Révisions



HIVER

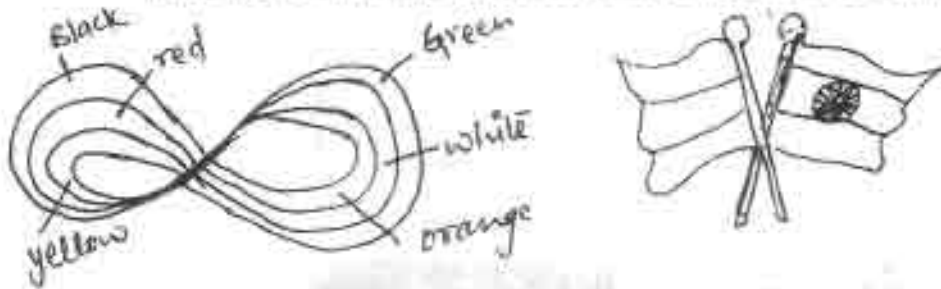
Ecris les mots qui sont sous le dessin à leur place.



arbre • écharpe • bonnet • cheminée • pullover •
cheval • neige • soupe • nez • bouche • voiture

GERMAN

1. Paint a plain white T-shirt with the tricolors of German flag and Indian flag to show the relationship between the two nations. For example:



2. Make bright & vivid collage of any of the followings:

a. Berlin monuments and landmarks (The Brandenburg Gate, Parliament of Germany (Reichstag), Berlin Wall, East Side Gallery Berlin, Television Tower in Berlin, Memorial Church in Berlin, Holocaust Memorial Berlin, Berlin's Museum Island, Berliner Dom, Charlottenburg Palace, Victory column (Siegessäule), Bellevue Palace.)

or

b. Sights & Attractions in Munich (Marienplatz (Marien square), Frauenkirche (Cathedral of our Blessed Lady), Dachau Concentration camp, the English Garden, BMW headquarters and Museum, Nymphenburg Palace, Residence Palace of Munich, neues Rathaus (New Town hall), Odeonsplatz, Olympiapark, Hofgarten, Alte Pinakothek, Old Town Hall, Allianz Arena, Karlsplatz)

3. Make a beautiful model of any of the following Castle in Germany:

- a. Neuschwanstein Castle: the classic fairytale's Castle
- b. The Sanssouci Castle
- c. The Eltz Castle
- d. The Wartburg Castle



SPANISH

lección 1

notas



Completa las fichas. Después preséntate y presenta a tu mejor amigo/a y a tu profesora/a.

LA AUTORA DEL LIBRO

Nombre: Fabiola
Apellidos: García Gil
País: España

Hola! Me llamo Fabiola García Gil y soy española.

TU MEJOR AMIGO/A

Nombre:

Apellidos:

País:

TU

Nombre:

Apellidos:

País:

TU PROFESOR/A DE ESPAÑOL

Nombre:

Apellidos:

País:

Completa las siguientes conversaciones con las palabras del cuadro.

- ¡Hola!
- ◊ ¡Hola! ¿..... te llamas?
- Me Víctor, ¿y
- ◊ llamo Concha española.

Soy
Llamo
Me
Cómo
tú

eres
tú
soy
De
¡Hola!

- Soy Antonio. ¿Y
- ◊ Yo, Ángela.
- ¿De dónde
- ◊ Puerto Rico.
- Pues yo colombiano.

notas



AA

Ejercicios de refuerzo

¿Cómo se escribe? Completa.

- frijoles i, ele,
- yuca i grieta,
- llamo elle,
- chocolate O, elr, e.
- esta le,
- vivas .., ese
- quena
- jógar

Ejercicios de refuerzo

Lee y deletrea el nombre de estas ciudades hispanoamericanas.

- a. Veracruz. b. Juliapa. c. Cochabamba. ch. Guadalajara.
- d. San Miguel. e. Barranquilla. f. Arequipa.

- a. use, e, ere, a, ee, erre, u, zeta.
- b.
- c.
- ch.
- d.
- e.
- f.

Deletrea tu nombre, tu apellido y tu ciudad.



¿Cómo te llamas?
.....
¿Cómo se escribe?
.....

¿Dónde vives?
.....
¿Cómo se escribe?
.....

notas



○ Completa los bocadillos con los saludos y las despedidas correspondientes.

1. ¡Buenos días!

¡Adios!

¡Hola!

¡Hasta luego!

¡Buenas noches!

¡Buenas tardes!



SANSKRIT

निम्न श्लोकों को अर्थ सहित याद करें

गायत्री मंत्र को हिन्दू धर्म में सबसे उत्तम मंत्र माना जाता है। यह मंत्र हमें ज्ञान प्रदान करता है।

ॐ भूर्भुवः स्वः

त सवितुर्वरेण्यम्

भर्गो देवस्य धीमहि

धियो यो नः प्रचोदयात् ॥

अर्थ-तीनों लोकों के उस वरण करने योग्य सूर्य देवता के तेज व शक्तियों का ध्यान करते हैं वह हमारी बुद्धि को प्रेरित करें।

१ त्वमेव माता च पिता त्वमेव ।

त्वमेव बन्धुश्च सखा त्वमेव ॥

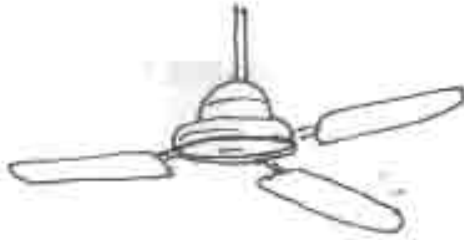
त्वमेव विद्या द्रविणं त्वमेव ।

त्वमेव सर्वं मम देव देव ॥

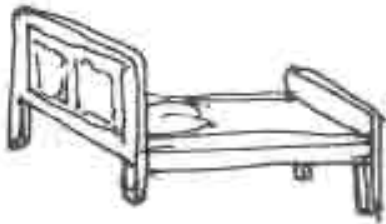
अर्थ-हे भगवान तुम्हीं माता और तुम्हीं पिता हो। तुम्हीं भाई और तुम्हीं मित्र हो। तुम्हीं विद्या और धन हो। हे देवाधिदेव तुम ही मेरे लिए सब कुछ हो।

नीचे दिए गए चित्रों के लिए संस्कृत शब्द ढूँढो और लिखो -







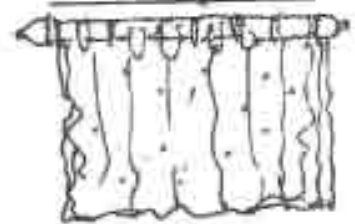




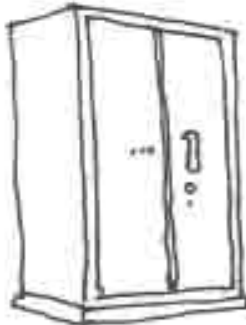




















Who am I ?

My ones digit is the smallest even number.

My tens digit is even and you will get it if you add one to the number of days in a week.

My hundreds digit is an even number which you will get if you multiply a number by itself.

If you multiply my thousands digit by itself, you will be get the greatest single digit odd number.

My ten thousands digit is an odd number between three and seven.

My hundred thousands digit is even and you will get it if you subtract one from the number of days in a week.

My millions digit is five times the smallest odd number.

Nancy had seven biscuits. She was a generous person, so she gave half of what she had, plus half of biscuit, to her baby sister. Then she gave half of what was left, plus half a biscuit, to her little brother. She kept half of what was left, plus half a biscuit, for herself. How many biscuits did each person get ?

Susan is a third as old as her mother, who is five years younger than Susan's father. Susan's grandmother is twice as old as Susan's father. Susan is ten. How old is her grandmother ?

If Rita can go around the garden 4 times in 20 minutes, how many times can she go around the garden in one and a half hours ?

The distance between two cities is 320 km. Ajay took two breaks of 30 minutes and 20 minutes respectively. His speed of driving is 80 km per hour. How long did Ajay take to cover the distance between the two cities.