

REVISION WORKSHEET - 1

Name : _____

Subject : E.V.S

Class : II Section: ____

Topic : Our Environment & Parts of plants

Date : _____

T. Sign : _____

Q.1. The picture shown below has a number of things in it. Some are living and the others are non-living. Point out which ones are living and which ones are non-living? Write them in their correct column.



LIVING THINGS			
NON - LIVING THINGS			

Q.2. Encircle the correct answers


- a) Human beings depend on plants and animals for their (food / bird)
- b) Plants breathe through small holes in their (leaves / flowers)
- c) Animals kill other animals for (fun / food)
- d) A puppy grows into a (boy / dog)
- e) A new plants grow from (branch / seeds)

Q.6. Write the difference between living and non living things


LIVING THINGS	NON LIVING THINGS
1.	1.
2.	2.
3.	3.

Q.7. Draw and colour the following and name them.


NATURAL THING



MAN MADE THING



LIVING THING



NON-LIVING THING

