

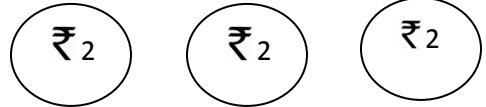
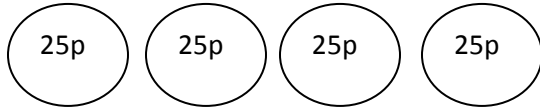
MATHS COMPREHENSIVE ASSESMENT TEST WORKSHEET NO-11
Class III

Session 2013-14

1. Match

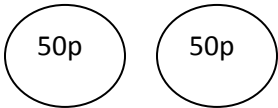
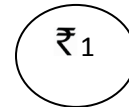
₹ 50

paise and rupee



₹ 10

₹ 20



₹ 5

₹

Indian denominations

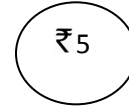
₹ 20

₹ 20

₹ 10

symbol of Indian rupee

6 coins of

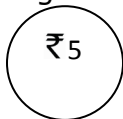


2. Convert the following:

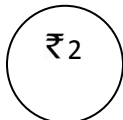
₹ 5 = _____ p	₹ 26 = _____ p
₹ 10 = _____ p	₹ _____ = 1200p
₹ _____ = 2500p	₹ _____ = 7600p

3. I have 100. I go to a stationary shop and buy

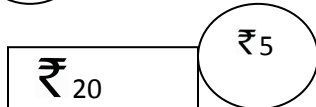
- a pencil



- an eraser



- a notebook



- a pencil box



- How much do I spend in total? _____
- How much money is left with me? _____
- After buying this stationary, will I be able to buy a chocolate worth ₹ 50?(yes/no) _____

