

COMMON ASSESSMENT TEST- MATHEMATICS


CLASS III
SESSION 2012-13

CHAPTERS	Fill In The Blanks (10)	Multiple choice Qs (15)	True/False (10)	Match The Following (5)	Application Based (10)	Total (50)
NUMBERS AND OPERATIONS	3×1	5×2	4×1	—	3×1	20
ROMAN NUMERALS	—	—	—	3×1	—	3
FRACTIONS	2×1	—	2×1	—	—	4
MONEY	—	1×1	1×1	—	4×1	6
GEOMETRY	4×1	1×1	1×1	—	—	6
MEASUREMENT	—	1×1	1×1	2×1	—	4
TIME	1×1	2×1	1×1	—	—	4
PICTOGRAPH	—	—	—	—	3×1	3
TOTAL	10	15	10	5	10	50

Handwritten signature and date:
28/03

SECTION-B

21. Write True or False for the following statements:

- a. The place value of 9 in 4906 is 90. _____
- b. 10 tens is equal to 10000. _____
- c. 40 in words is written as forty. _____
- d. The sum of largest one digit number and smallest two digit number is 19. _____
- e. A triangle has four sides and four corners. _____
- f.  The shaded portion in the figure above represents $\frac{1}{4}$. _____
- g. There are 100 paise in 10 rupees. _____
- h. May is the shortest month of the year. _____
- i. A cubit is a standard unit of measurement. _____
- j. Four quarters make one whole. _____



SECTION-C

22. Match the following:

- | | | | |
|----|------------|-----------------|-----|
| a. | IX | 300 centimetres | () |
| b. | XXVII | XL | () |
| c. | 40 | 9 | () |
| d. | 3 metres | 8 Kilograms | () |
| e. | 8000 grams | 27 | () |

SECTION-D

23. Four friends went in a garden. While they were enjoying the rides, their purses fell down and got mixed up. Use the given clues and write the names in the space below to whom the purse belongs:



Your clues are:

- Meenal had four 5 rupee notes and one 1 rupee note.
- Reena had two 20 rupee notes and one 50 rupee note.
- Tanya had six 10 rupee notes and four 1 rupee notes.
- Charu had five one rupee notes and two 10 rupee notes.

SECTION-E

24. Rohan's mother gave him a one hundred rupee note. He spent Rs 25 on UNO cards and Rs 30 on Cornetto ice-cream. How much money did he save?

Sol

25. Given below is a table showing the appreciation stars given to the students of class III for English conversation :

S.NO.	STUDENT'S NAME	NUMBER OF STARS
1	Reena	★ ★ ★ ★ ★
2	Karan	★ ★ ★
3	Arun	★ ★ ★ ★ ★ ★
4	Seema	★ ★ ★
5	Neena	★ ★

Based on the above given table answer the following questions:

- a. Which student got maximum number of stars? _____
- b. Which student got minimum number of stars? _____
- c. Which two students got the same number of stars? _____

Space for rough work