

TOPIC: Who is heavier?


Date _____

WORK SHEET No. 1

Month _____

Competency: Understanding Basic Concepts

I. Tick the object that will weigh more:



II. Encircle the heavier weight:

20g

50g

5kg

8kg

250g

175g

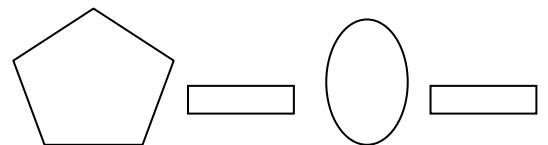
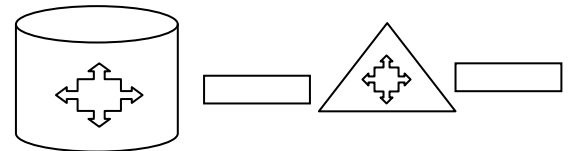
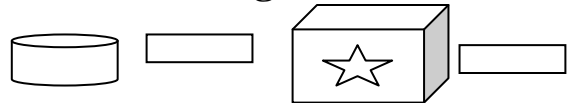
50kg

276kg

100kg

100g

III. Tick the object that will weigh less:



Teacher's Signature

Parent's Signature