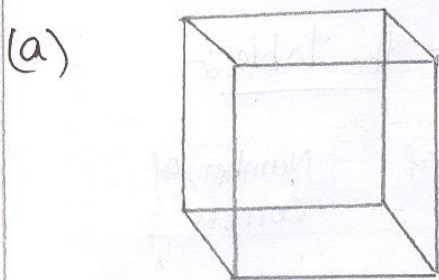


SA2 - WorksheetClass: IIISubject: Maths Chapter: - Shape, Space & patternsWrite the shapes of the following:-

- a) A bottle cap is _____.
- b) A postcard is _____.
- c) A cup is _____.
- d) A dice is _____.
- e) A ball is _____.

II. Write the names of the following shapes:-

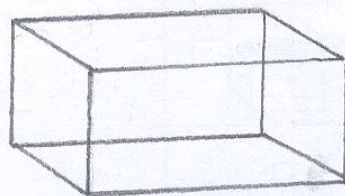
(b)



(c)



(d)




(e)




III Write the corners and sides of each figure:-

(a)



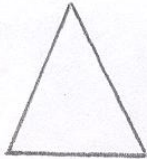
_____ Corners
_____ Sides

(b)



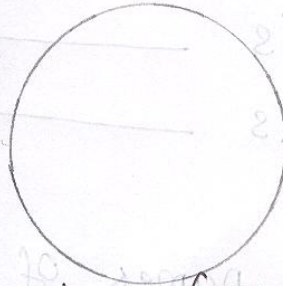
_____ Corners
_____ Sides

(c)






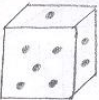

_____ Corners
_____ Sides

(d)




_____ Corners
_____ Sides.

IV Look at these objects and complete the table:-

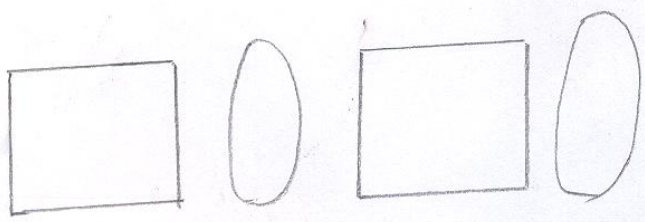
Object	Shape	Number of edges	Number of faces	Number of Corners
				
				
		(b)		(c)
				
				

✓ Complete the pattern:-

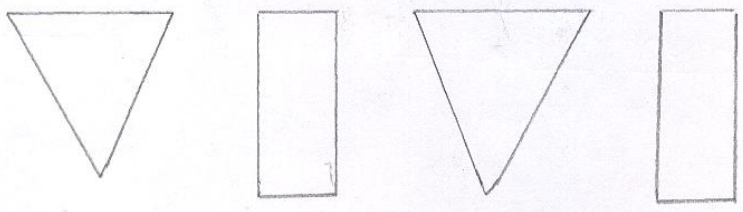
(a)



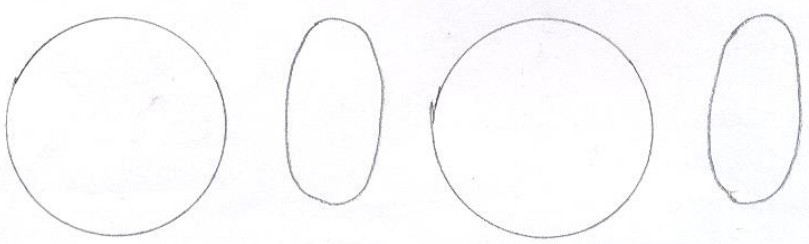
(b)



(c)



(d)



Q III Use any method to divide.

1) $92 \div 7$

2) $75 \div 4$

3) $94 \div 8$

4) $56 \div 2$

5) $73 \div 3$

6) $95 \div 4$

7) $576 \div 2$

8) $712 \div 2$

9) $506 \div 3$

10) $726 \div 6$

11) $499 \div 9$

Q IV Solve these word problems.

1. There are 75 tyres in a shop. 4 tyres were used on each car. How many cars would get tyres? How many tyres would be remaining?

2. Ahmed had 45 pencils. He puts 2 pencils in each bag. How many bags did he use? How many pencils were left over?

3. 79 children were standing in rows of 5 each. How many full rows did they make. How many children were left?

4. Anila had 90 photos. She pasted 7 photos on a page. How many full pages did she have? How many photos were left over?